
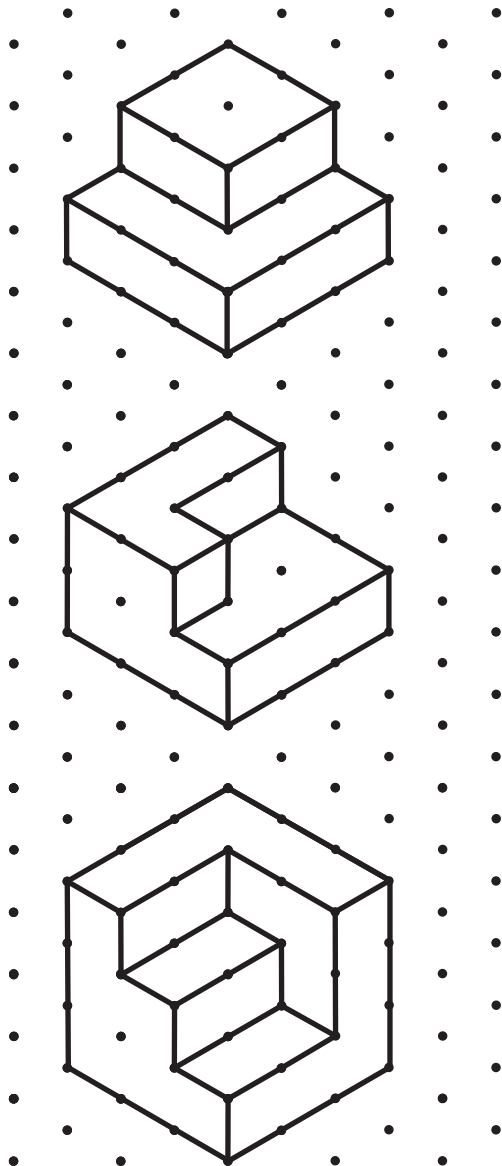


Name: _____

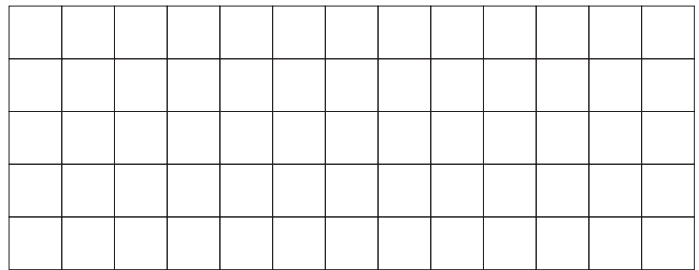
Draw the front, side and top views of the following objects.

Example

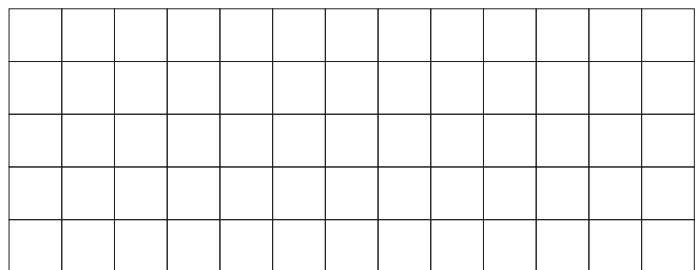
The example shows a 3D object on a dot grid. The object is a 2x2x1 rectangular prism with a 1x1x1 cube on top of one of the corners. Arrows labeled 'Side' and 'Front' indicate viewing directions. To the right, three 5x5 grids show the corresponding 2D views: Front View (a 2x2 grid with the top-right cell missing), Side View (a 2x2 grid with the top-right cell missing), and Top View (a 2x2 grid with the top-right cell missing).



Front View Side View Top View



Front View Side View Top View



Front View Side View Top View